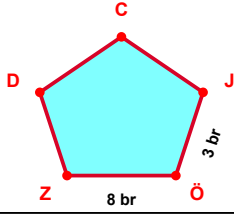
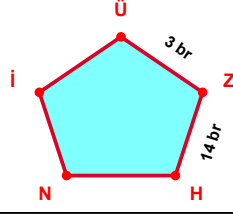


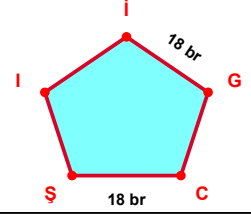
SORU: Aşağıdaki şekillerde verilen, kenar uzunlukları farklarını bulunuz.



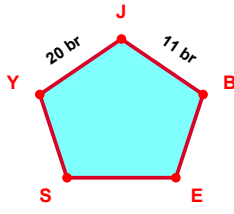
$$|ZÖ| - |ÖJ| = \dots\dots\dots$$



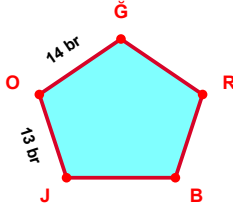
$$|HZ| - |ZÜ| = \dots\dots\dots$$



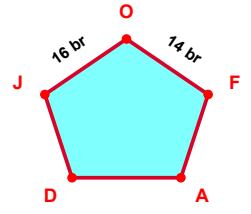
$$|ŞC| - |Gİ| = \dots\dots\dots$$



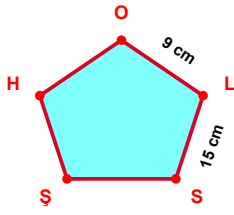
$$|JY| - |BJ| = \dots\dots\dots$$



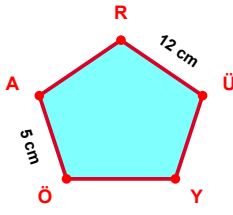
$$|ĞO| - |OJ| = \dots\dots\dots$$



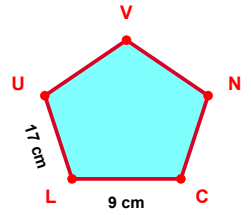
$$|OJ| - |FO| = \dots\dots\dots$$



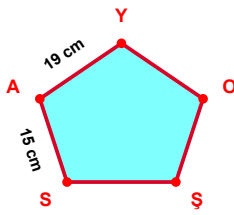
$$|SL| - |LO| = \dots\dots\dots$$



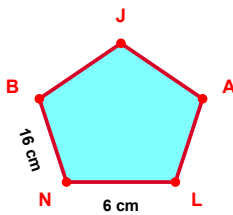
$$|ÜR| - |AÖ| = \dots\dots\dots$$



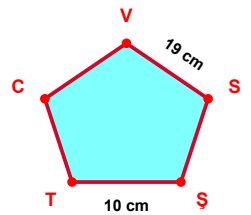
$$|UL| - |LC| = \dots\dots\dots$$



$$|YA| - |AS| = \dots\dots\dots$$

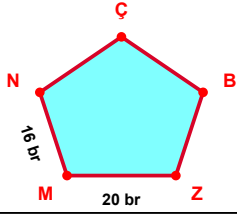


$$|BN| - |NL| = \dots\dots\dots$$

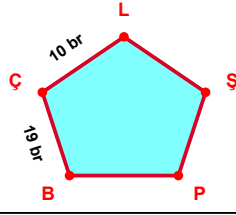


$$|SV| - |TŞ| = \dots\dots\dots$$

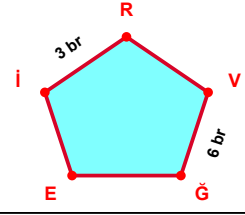
SORU: Aşağıdaki şekillerde verilen, kenar uzunlukları farklarını bulunuz.



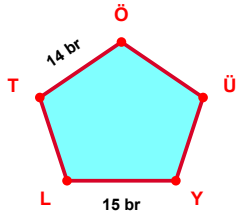
$$|MZ| - |NM| = \dots\dots$$



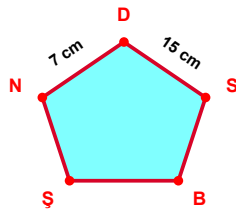
$$|ÇB| - |LÇ| = \dots\dots$$



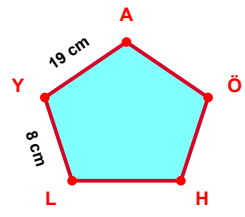
$$|ĞV| - |Rİ| = \dots\dots$$



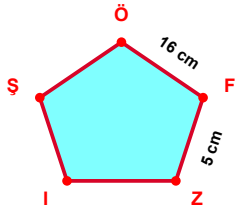
$$|LY| - |ÖT| = \dots\dots$$



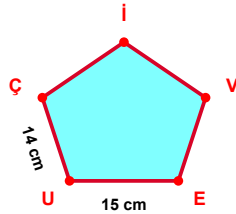
$$|SD| - |DN| = \dots\dots$$



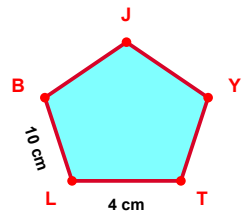
$$|AY| - |YL| = \dots\dots$$



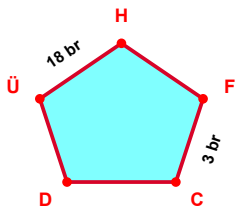
$$|FÖ| - |ZF| = \dots\dots$$



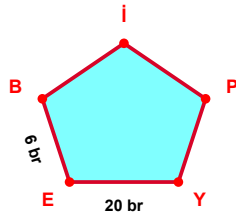
$$|UE| - |ÇU| = \dots\dots$$



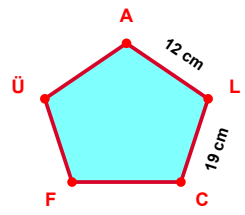
$$|BL| - |LT| = \dots\dots$$



$$|HÜ| - |CF| = \dots\dots$$



$$|EY| - |BE| = \dots\dots$$



$$|CL| - |LA| = \dots\dots$$

SÜREÇ ODAKLI DEĞERLENDİRME ÖLÇEĞİ

Doğru Sayısı: / 24

Öğretmen ilgili kutucuğu işaretler.

Geliştirilmeli (0-8)

İyi (9-14)

Çok İyi (15-20)

Mükemmel (21-24)



Hazırlayan:

Bu bölüme sınıfınızın ilgili kazanıma yönelik genel durumuna ilişkin gözlem ve izlenimlerinizi, öğrencilerinizin bu kazanımla ilgili öğrenme eksikliklerini ve bu eksikliklerin giderilmesi amacıyla yaptığınız/yapmayı planladığınız faaliyetleri not edebilirsiniz.

No	Adı - Soyadı	Toplam Puan	Değerlendirme
1			
2			
3			
4			
5			
6			
7			
8			
9			
10			
11			
12			
13			
14			
15			
16			
17			
18			
19			
20			
21			
22			
23			
24			
25			
26			
27			
28			
29			
30			
31			
32			
33			
34			
35			

Hazırlayan: